



**INDIAN SCHOOL MUSCAT
MIDDLE SECTION
DEPARTMENT OF SOCIAL SCIENCE**

IN THE EARLIEST CITIES

NAME: _____ **CLASS VI SEC:** _____ **ROLL NO:** _____ **DATE:** ___/08/2017

I. MULTIPLE CHOICE QUESTIONS

Choose the correct option to complete the statements given below –

1. The Great Bath has been discovered at _____
 - a) Lothal
 - b) Mohenjodaro
 - c) Harappa
 - d) Kalibangan
2. Present day Harappa is located in _____
 - a) India
 - b) Pakistan
 - c) Afghanistan
 - d) Srilanka
3. The city of Lothal was situated beside a river which was a tributary of _____
 - a) Rr Ganga
 - b) Rr Sabarmati
 - c) Rr Kaveri
 - d) Rr Narmada
4. What caused the end of Harappan civilization _____
 - a) Deforestation
 - b) Rulers lost control
 - c) Flooding
 - d) All of the above

II. FILL IN THE BLANKS

1. The eastern part of Harappan cities , which was usually larger but lower, has been referred to as the _____
2. The Great Bath was made water tight with a layer of _____
3. Metals like gold and silver were used to make ornaments and _____
4. Cotton was grown at _____ from about 7000 years ago.
5. The Harappans got copper from the present day _____
6. A _____ is a person who is trained to do only one kind of work.
7. _____ are substances that are either found naturally or produced by farmers or herders.
8. A tool called _____ was used to dig the earth for turning the soil and planting seeds.

III. TRUE AND FALSE

1. The fire altars were seen in Kalibangan and Mehrgarh: _____
2. The bricks in Harappa were well baked and laid in an interlocking pattern: _____
3. All raw materials were available locally: _____
4. Harappa region received a lot of heavy rainfall and did not require any kind of irrigation: _____
5. Lothal was situated near areas where raw materials such as semi-precious stones were easily available: _____

IV. ANSWER THE FOLLOWING IN TWO POINTS:

1. When and how the site of Harappa was first encountered?
2. Describe two features of Harappan cities?
3. Name the Harappan cities, where fire altars and elaborate store houses were located?




V. ANSWER THE FOLLOWING IN THREE POINTS:

1. Write about the drains in the Harappan cities?
2. Give three important features of the 'Great Bath'?

VI. ANSWER THE FOLLOWING IN FOUR POINTS:

1. Write a short note on the city of Lothal.
2. What could have been the possible reasons behind the end of the Harappan civilization?

VII. IDENTIFY THE FOLLOWING PICTURES AND THEN MATCH THE FOLLOWING:

<i>PICTURES</i>	<i>DESCRIPTION</i>	<i>RESPONSE</i>
 1. _____	a) Public bath where important people took a dip on special occasions	1-
 2. _____	b) Model of a tool used for digging the earth and turning the soil	2-
 4. _____	c) A stone statue found in Mohenjodaro	3-